

Exploring Weight: Customary Units

Compare. Use $<$, $>$, or $=$.

1. 16 ounces 1 pound

2. 1 ounce 1 pound

3. 18 ounces 1 pound

4. 12 ounces 1 pound

Circle the better estimate for each.

5.



a. 11 oz

b. 11 lb

6.



a. 2 oz

b. 2 lb

7.

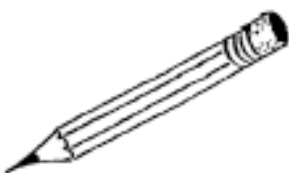


a. 7 oz

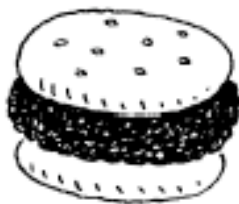
b. 7 lb

Write whether each is less or more than a pound.

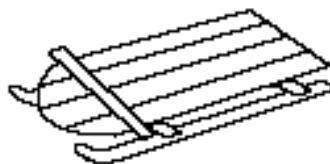
8.



9.



10.



11. Suppose a dog weighs 8 pounds. How many ounces does it weigh? _____

12. Suppose a person's brain weighs about 3 pounds. How many ounces does it weigh? _____

13. Complete the table.

Ounces	16	32		64	80	96
Pounds	1	2				